

Number of pages5
Number of questions4
Total marks.....100

THE UNIVERSITY OF ADELAIDE
SCHOOL OF MECHANICAL ENGINEERING

EXAMINATION FOR THE DEGREE OF B.E.

MECH ENG 2005: MACHINE DYNAMICS

EXAMINATION - SEMESTER 2, 2002

DURATION: 3 HOURS & 10 MINUTES

[Students are advised to devote 10 minutes to reading the paper and planning their approach.]

[The use of notes, textbooks and calculating devices with the exception of laptop computers is permitted in the examination room.]

Attempt **ALL FOUR** questions.

PLEASE SEE NEXT PAGE

1. In the planetary reduction unit shown in Figure 1, gear 2 turns at 300 rpm in the direction indicated. Determine the angular velocity and direction of rotation of gear 5.

[18 marks]

How many revolutions of gear 2 are required for Arm 6 to complete one full revolution?

[5 marks]

Does Arm 6 rotate in the same direction or in a direction opposite to gear 2?

[2 marks]

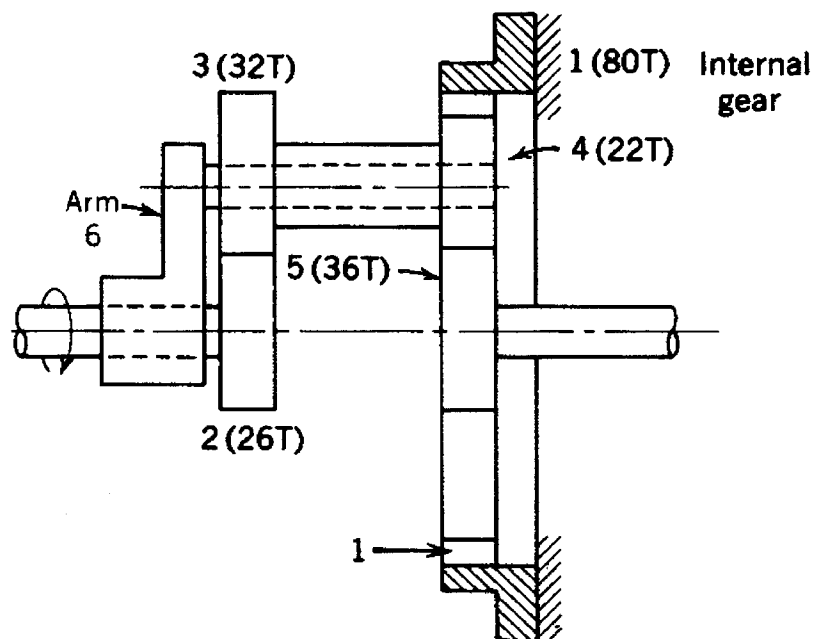


Figure 1

2. Masses m_1 and m_2 of the rotor in Figure 2 rotate in the transverse planes shown. Determine the masses m_3 and m_4 in planes 3 and 4, respectively, which give dynamic rotating balance. Show the correct angular positions of m_3 and m_4 .

[25 marks]

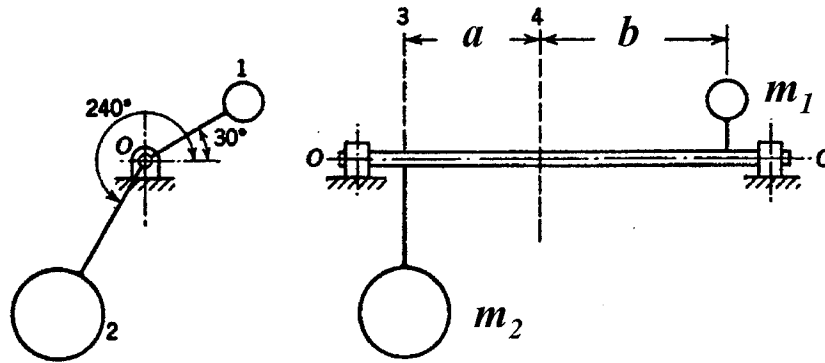


Figure 2

- $m_1 = 4 \text{ kg}$
 $m_2 = 10 \text{ kg}$
 $a = 150 \text{ mm}$
 $b = 200 \text{ mm}$
 $r_1 = 125 \text{ mm}$
 $r_2 = 187.5 \text{ mm}$
 $r_3 = 100 \text{ mm}$
 $r_4 = 100 \text{ mm}$

PLEASE SEE NEXT PAGE

3. For the linkage of Figure 3, link 2 rotates at a constant angular velocity. Figure 3 is drawn at $1/10^{\text{th}}$ scale. Construct the velocity polygons and graphically compute v_A , v_B and v_C , and the magnitude and direction of ω_3 and ω_4 .

[10 marks]

Construct the acceleration polygons and graphically compute a_C and the magnitude and direction of α_3 and α_4 .

[15 marks]

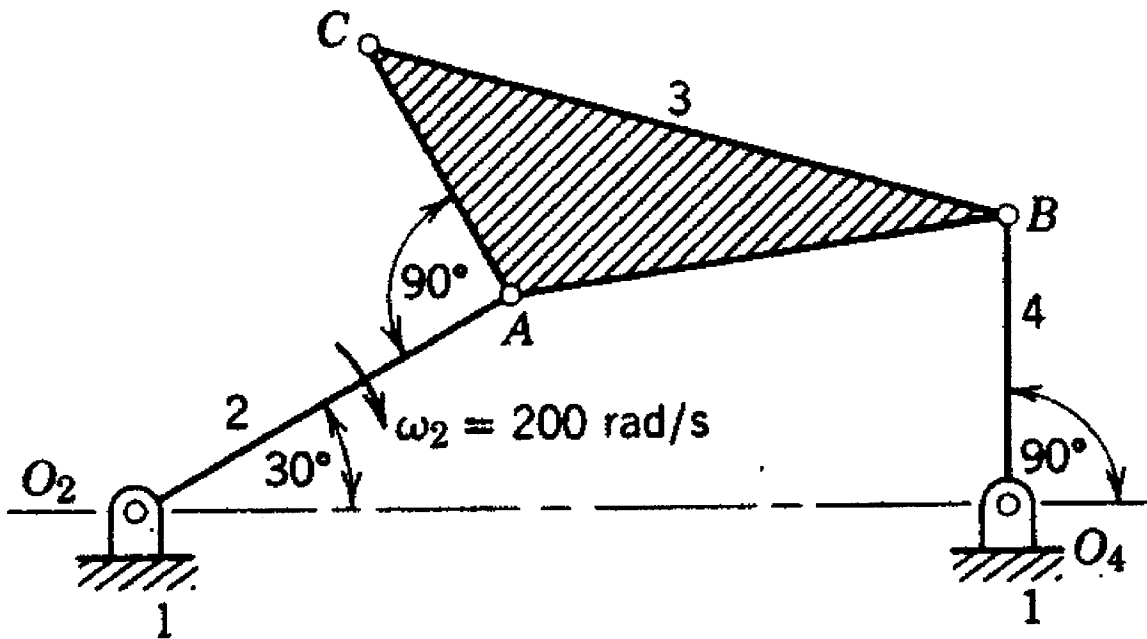


Figure 3

PLEASE SEE NEXT PAGE

4. For the mechanism shown in Figure 4, determine the magnitudes, directions, senses and locations of the inertia forces acting on links 2, 3, and 4 given that the acceleration of point A is 60 m/s^2 to the right, and the acceleration of point B is 30 m/s^2 downwards. Show the results on a scale drawing of the mechanism. Determine the unknown accelerations graphically.

[15 marks]

Determine the magnitude and direction of the reaction forces at the slider walls at the locations of links 2 and 4. Assume that there is negligible friction and that the influence of gravity on the mechanism is negligible.

[10 marks]

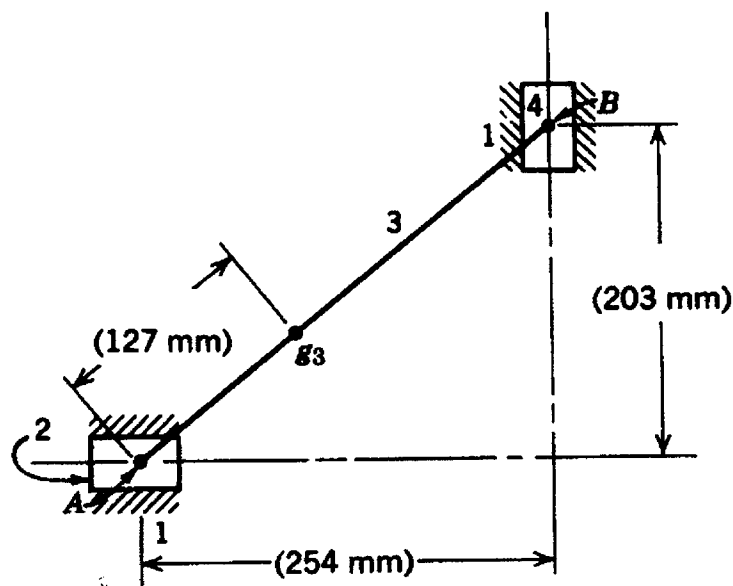


Figure 4

$$\begin{aligned}
 m_2 &= 3 \text{ kg} \\
 m_3 &= 5 \text{ kg} \\
 m_4 &= 3 \text{ kg} \\
 I_3 &= 0.12 \text{ kg m}^2
 \end{aligned}$$

END OF PAPER